



G.D. DAY PUBLIC SCHOOL

BHANDARKOLA, SATAR

WINTER BREAK WORKSHEET

SUBJECT:- EVS

- 1) Which of the following activities generally takes minimum time?
a) Eating food b) Sleeping c) Drinking water d) Studying
- 2) Money plant, pea plant and grapevine are some examples of.....
a) Shrubs b) Herbs c) Creepers d) Climbers
- 3) Which of the following is an incorrect match?
a) Ice-cream – Hot day
b) Umbrella – Windy day
c) Woolen cap – Cold day
d) Gumboot – Rainy day
- 4) Which of the following groups of things does not need air to survive?
a) River, Bird ,Soil ,Sky
b) Man , Eagle , Tree , Bicycle
c) Laptop, Balloon , Swimming float , Wooden chair
d) Table, Plant, Water , Aeroplane
- 5) 6 fish, 4 plastic toys and 35 colored rocks were placed in an aquarium. The number of each one of them in the aquarium was recorded for the next 4 weeks as shown in the given table . The given table shows -

Week	Fish	Plastic toys	Colored rocks
1	6	4	35
2	6	4	35
3	10	4	35
4	14	4	35

- a) Only living things can grow
- b) Only living things can reproduce
- c) Only non living things can grow
- d) Only non living things can reproduce

6) Write three uses of water .

.....

7) Think about your daily routine and write down how much water you use for:-

a) Drinking- glasses .

b) Bathing - buckets .

c) Watering two pots of plants - mugs.

d) Brushing - mugs .

8) Draw five picture of woollen clothes and write five lines about WINTER SEASON.

9) Write and draw five sources of water.

.....

.....

.....

.....

.....

Name-

Roll No. -

Sec.-

1) **Fill in the blanks**

a. 1 L = ----- ml

b. 1Kg = ----- g

c. 1 m = ----- cm

d. The standard unit of capacity is -----.

e. The standard unit of weight is -----.

f. The standard unit of length is -----.

2) **Tick the correct option**

a. For measuring the weight of light objects we use

a) gram b) kilogram c) litre

b. For measuring the capacity of small objects we use

a) litre b) gram c) millilitre

c. For measuring the length of small objects we use

a) litre b)centimetre c) gram

3) **Draw measures of the following**

a. 1 kg

b. 2 kg

c. 5 kg

d. 10kg

4) **What unit should you use to measure these**

- a. A book ----
- b. A pencil ----
- c. A flower -----
- d. Petrol in a car ----
- e. Milk in a cup ---
- f. Water in a tank ----
- g. Length of your classroom ----
- h. Length of your table -

5) **Add it**

L	ml
47	028
+ 57	038

L	ml
49	047
+ 56	061

6) **Add and write**

- a). $2L + 500ml + 100ml =$
- b). $5L + 200ml + 50 ml =$
- c) $3L + 400ml + 400ml =$
- d) $1L + 1L + 500 ml =$

Missing Factors!



Help! The sneaky leprechaun has stolen a factor out of these multiplication problems! He dropped a coin from his pot of gold where each factor should be. Help figure out the missing factors!

1) $6 \times \text{●} = 18$

2) $5 \times \text{●} = 40$

3) $\text{●} \times 3 = 27$

4) $6 \times \text{●} = 42$

5) $\text{●} \times 4 = 32$

6) $\text{●} \times 9 = 18$

7) $7 \times \text{●} = 49$

8) $\text{●} \times 6 = 48$

9) $3 \times \text{●} = 27$

10) $5 \times \text{●} = 20$

11) $\text{●} \times 2 = 12$

12) $9 \times \text{●} = 0$



Page



Q.1. Identify the shape of the following objects:

- a) candle _____
- b) watermelon _____
- c) carrot _____
- d) Ice cube _____

Q.2. Complete the following:

Shapes	Number of sides	Number of vertices
a) Square		
b) Triangle		
c) Circle		
d) Rectangle		

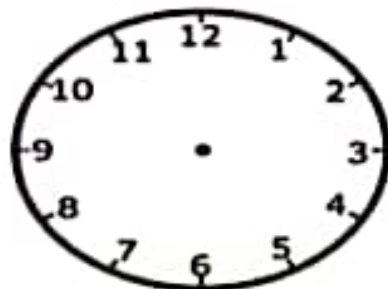
Q.3. Solve the following:

	m		cm	
	2	8	4	6
+	1	6	2	5

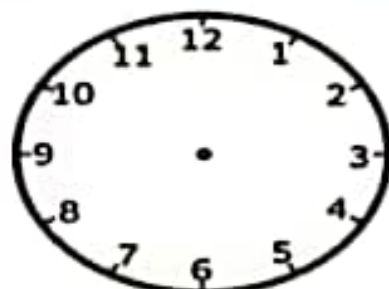
	m		cm	
	7	2	9	0
-	4	8	6	5

	m		cm	
	7	0	5	0
+	3	5	2	1

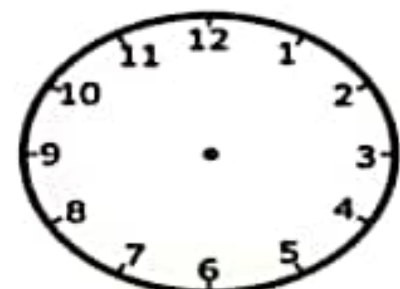
Q.4. Draw hands on each clock to show the given time:



11'O clock



Half past 3



30 minutes past

. Use knuckle trick to write number of days in each month

January -----

September -----

February ----

October -----

March -----

November -----

April ----

December -----

May ---

June ---

July ----

August -----

.Multiply these

T 0

T 0

2 4

9 0

x 2

x 3.

SUBJECT – ENGLISH.

CLASS:- Two

Write the name of ten things which you see in your surroundings and also make sentence with these words.

- A) _____.
- B) _____.
- C) _____.
- D) _____.
- E) _____.
- F) _____.
- G) _____.
- H) _____.
- I) _____.

Fill in the blanks with naming words :

- A) _____ is playing with his ball.
- B) _____ is a beautiful country.
- C) _____ is a domestic animal.
- D) _____ is sleeping on her bed.
- E) _____ cooks tasty food.
- F) _____ is a wild animal.
- G) _____ is sowing the seeds.
- H) _____ is selling the things.
- I) _____ is reading newspaper.
- J) _____ sings sweetly.

Fill in the blanks with replacing words

- There are six members in _____ family. My grandfather's name is Mr Raj Sinha.
- _____ goes to park every day. My grandmother's name is Mrs Seema Sinha.
- _____ goes to temple every day. My father's name is Mr Rohan Sinha.
- _____ goes to office everyday. My mother's name is Mrs Sneha Sinha.
- _____ is a house wife. _____ sings very well.

Complete these pairs.

- A) Grandfather and grandmother.
- B) _____ and actress.
- C) _____ and sister.
- D) _____ and aunt.
- E) _____ and niece.
- F) _____ and washerwoman.
- G) _____ and mother .
- H) _____ and hen.
- I) _____ and heroine.
- J) _____ and wife.

Complete it with suitable describing words.

- _____ basket.
- _____ girl.
- _____ flower.
- _____ dress.
- _____ rabbit.
- _____ hair.
- _____ lady.
- _____ juice.
- _____ boy.
- _____ bag.

Arrange the words in right order to make sentence.

A) Blue/ This/is/a/pen

B)expensive / an/That/ watch/is

C)rich/very/is/woman/That

D) dress/really/your/ clean/is/very

E) very/My/ long/ hair/ is

-----Write the

opposite of following words:

a) Day - _____

b) Inside - _____

c)Short - _____

d)Hard - _____

e)Under - _____

f)Weak - _____

g)Dirty - _____

h)Beautiful - _____

i) Right - _____

j) Friend- _____.

Fill in the blanks with is/ am/are

1) There _____ seven days in a week.

2) The bottle _____ empty.

3) We _____ at the bus stand .

4) I _____ very strong.

5) You _____ are my best friend.

6) There ___ a laptop on the table.

7) Who _____ you ?

8) This picture _____ very attractive.

9) I _____ going to the zoo.

10) Sonu and sunny _____ brothers.

Make a Makar Sankranti greeting card.



1. दिए गए शब्दों के शुद्ध रूप लिखिए।

(क) सकुल

(ख) रोटि

ग) खिलोना

•• (घ) चडिया घर

(ङ) शिकछक

(च) डाक्टर

2. समान लय वाले 2 - 2 शब्द लिखे।

(क) जंगल -

(ख) कच्चा -

(ग) डंडा -

(घ) खीर -

(ङ) लोटा -

निम्नलिखित शब्दों के विलोम शब्द लिखिए -

ऊपर	X
आगे	X
दुखी	X
अच्छा	X
सच	X
गन्दा	X
दिन	X
जीत	X
हल्का	X
सूखा	X
बड़ा	X
आसमान	X

वचन बदलिए

बिल्ली	-	<input type="text"/>
कहानी	-	<input type="text"/>
थैला	-	<input type="text"/>
कविता	-	<input type="text"/>
वस्तु	-	<input type="text"/>
गुड़िया	-	<input type="text"/>
जाति	-	<input type="text"/>
पंक्ति	-	<input type="text"/>
मुर्गा	-	<input type="text"/>
कुर्ता	-	<input type="text"/>

दिए गए शब्दों को सही क्रम में रख कर वाक्य बनाए

१. सब्जी / की / बहुत / है / दुकान / में / भीड़

२. पंख / के / रंगीन / मोर / होते / है

३ . आज / मेहमान / घर / है / पर / आ / रहें

४ . जलेबी / पसंद / मुझे / है / खाने / में / बहुत /

५. सारे / बच्चे / खेल / मजे / से / रहे / है

प्रश्न- नीचे दिए गए अनेक शब्दों के लिए सही एक शब्द चुनकर उसे खाली जगह में लिखिए ।

- वर्ष में एक बार होने वाला - _____
- बच्चों को पढ़ाने वाला - _____
- जो खेती करता हो - _____
- मिट्टी के बर्तन बनाने वाला - _____
- जो मरीजों का इलाज करता हो - _____
- जिसे देख कर डर लगे - _____
- जो आलास करता हो - _____
- जहाँ बहुत सारी पुस्तकें हो - _____
- मिठाई बनाने और बेचने वाला - _____
- डाक बाँटने वाला - _____
- फौज में काम करने वाला - _____

