



**GEETA DEVI DAV PUBLIC SCHOOL,
BHANDARKOLA SATAR ROAD
DEOGHAR**

CLASS-1

WINTER ASSIGNMENT

Subject-English

Have or Has?

I _____ a short pen.

You _____ a cute cat.

I _____ an apple.

He _____ book.

She _____ wallet.

You _____ key.

She _____ camera.

It _____ red bell.

Kate _____ big bag.

Scott _____ umbrella.

I have
You have

He has
She has
It has



Fill in the blanks with is, am or are

1. Anil _____ swimming in the pool.

2. The school bell _____ ringing

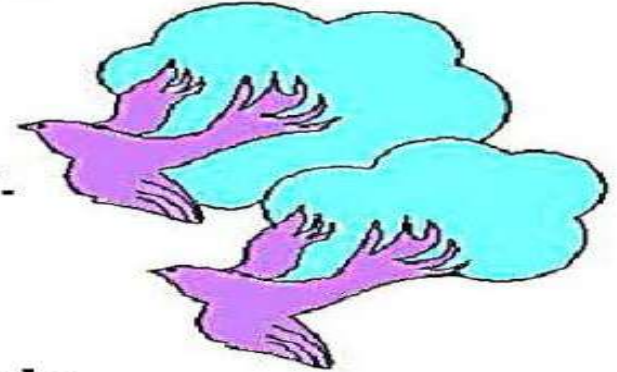


3. I _____ Mitthu.

4. Ships _____ sailing in the sea.

5. I _____ not a rabbit.

6. Birds _____ flying in the sky.



7. We _____ happy.


8. Raju and Bobby _____ friends.

9. These children _____ playing in the garden.

10. The Tiger _____ feeling hungry.

11. I _____ not an idiot.

12. This _____ a lotus flower.



Here-There

Remember that adverbs of place describe where something is.

→ here

→ there

→ He is standing here. → She is standing there.

Write the correct adverb of place here or there.

1. I want to play _____.
2. My homework is _____.
3. Please sit _____.
4. I will meet you _____.
5. You can out my backpack _____.
6. The school is _____.
7. She is waiting for you _____.
8. I have lived _____ all my life.
9. Stop right _____.
10. You can stay _____ with me.

SUBJECT -HINDI

नीचे दिए गए शब्दों में सही स्थान पर चंद्रबिंदु (ँ) लगाइए।

	मा
	छाव
	धुआ
	मूछ
	बूद
	टाग

दिए गए शब्द सही मात्रा के नीचे लिखें

औजार

कोमल

सोना

चौकोर

रौनक

पौधा

गोकुल

नौकर

मोर

दोपहर

ओ की मात्रा	औ की मात्रा

दिए गए विपरीत शब्दों के जोड़े मिलाए:

दिन

आगे

नीचे

सरदी

मोटा

रात

सोना

बैठना

उठना

जागना

पीछे

ऊपर

गरमी

पतला

लिंग

लिंग बदलो - (जैसे : दादा-दादी।)

लड़का - _____

नाना - _____

चाचा - _____

मामा - _____

आदमी - _____

मुर्गा - _____

घोड़ा - _____



सही जोड़ी मिलाइए।

राजा

देव

भाई

काका

शेर

मोर

बकरा

मोरनी

बकरी


शेरनी

देवी

काकी

रानी

बहन



SUBJECT -MATHS

Hundreds, Tens, and Ones

Write the correct number in each blank.

$2 \text{ tens} = \underline{\hspace{2cm}}$

$6 \text{ tens} = \underline{\hspace{2cm}}$

$3 \text{ hundreds} = \underline{\hspace{2cm}}$

$7 \text{ ones} = \underline{\hspace{2cm}}$

$4 \text{ ones} = \underline{\hspace{2cm}}$

$8 \text{ tens} = \underline{\hspace{2cm}}$

$5 \text{ hundreds} = \underline{\hspace{2cm}}$

$9 \text{ ones} = \underline{\hspace{2cm}}$

$1 \text{ hundred} + 4 \text{ tens} + 3 \text{ ones} = \underline{\hspace{2cm}}$

$3 \text{ hundreds} + 2 \text{ tens} + 5 \text{ ones} = \underline{\hspace{2cm}}$

$9 \text{ hundreds} + 8 \text{ tens} + 1 \text{ one} = \underline{\hspace{2cm}}$

$7 \text{ hundreds} + 4 \text{ tens} + 2 \text{ ones} = \underline{\hspace{2cm}}$

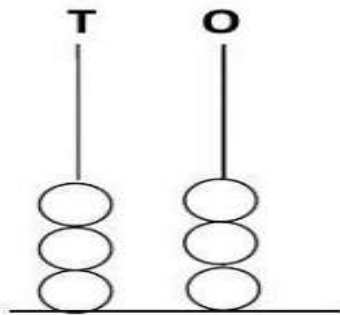
$5 \text{ hundreds} + 4 \text{ tens} + 2 \text{ ones} = \underline{\hspace{2cm}}$

$4 \text{ hundreds} + 8 \text{ tens} + 9 \text{ ones} = \underline{\hspace{2cm}}$

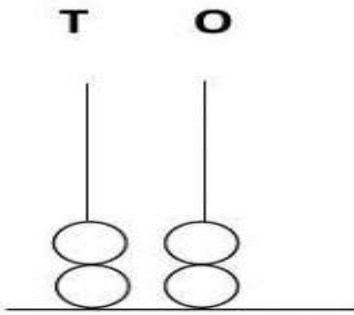
$2 \text{ hundreds} + 5 \text{ tens} + 8 \text{ ones} = \underline{\hspace{2cm}}$

$6 \text{ hundreds} + 3 \text{ tens} + 2 \text{ ones} = \underline{\hspace{2cm}}$

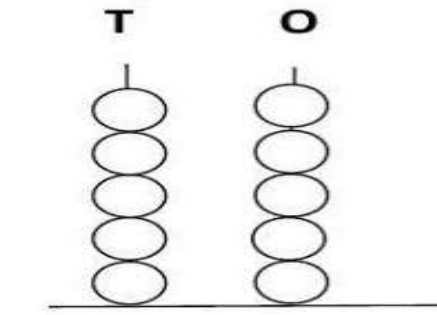
What number does the abacus show?



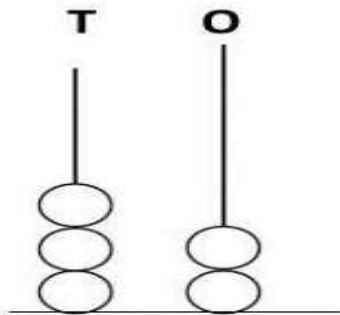
___ + ___ = ___



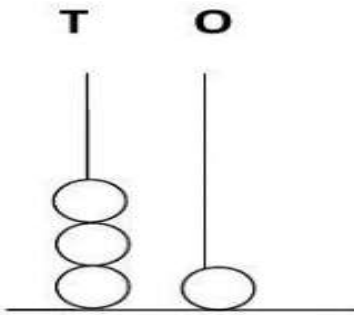
___ + ___ = ___



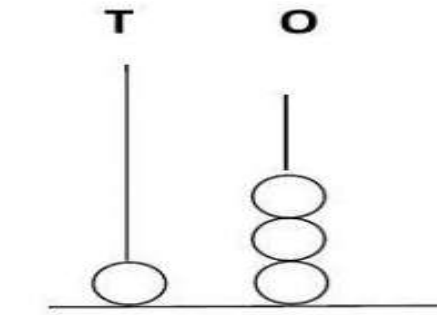
___ + ___ = ___



___ + ___ = ___



___ + ___ = ___



___ + ___ = ___

Fill in the correct tens and ones for the given numbers:

a) 46 = _____ tens + _____ Ones

b) 50 = _____ tens + _____ Ones

c) 34 = _____ tens + _____ Ones

d) 9 = _____ tens + _____ Ones

ADD Or SUBTRACT ?

5 6 00 3 5 3

+

□

□

□

□

□

4 3 2 3 4

=

=

=

=

=

=

9 7 7 4 4

Subtraction

Subtract

$$\begin{array}{r} 10 \\ - 1 \\ \hline \\ \hline \end{array}$$

$$\begin{array}{r} 12 \\ - 7 \\ \hline \\ \hline \end{array}$$

$$\begin{array}{r} 14 \\ - 11 \\ \hline \\ \hline \end{array}$$

$$\begin{array}{r} 18 \\ - 15 \\ \hline \\ \hline \end{array}$$

$$\begin{array}{r} 20 \\ - 10 \\ \hline \\ \hline \end{array}$$

$$\begin{array}{r} 10 \\ - 5 \\ \hline \\ \hline \end{array}$$

$$\begin{array}{r} 19 \\ - 17 \\ \hline \\ \hline \end{array}$$

$$\begin{array}{r} 13 \\ - 11 \\ \hline \\ \hline \end{array}$$

$$\begin{array}{r} 15 \\ - 14 \\ \hline \\ \hline \end{array}$$

$$\begin{array}{r} 12 \\ - 10 \\ \hline \\ \hline \end{array}$$

$$\begin{array}{r} 14 \\ - 10 \\ \hline \\ \hline \end{array}$$

$$\begin{array}{r} 9 \\ - 5 \\ \hline \\ \hline \end{array}$$



SUBJECT -EVS

Write the animal names in the appropriate column

Tiger

Donkey

Wolf

Zebra

Buffalo

Goat

Cat

Lion

Dog


Domestic animals	Wild animals
①	①
②	②
③	③
④	④
⑤	⑤

Sources of Water

Cut and paste the image onto the box.



Rain



Well



Lake



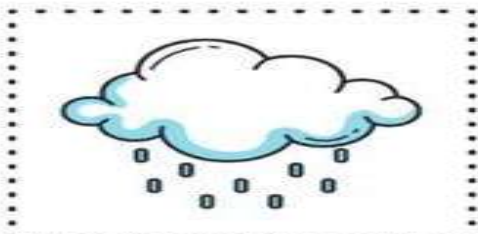
River



Sea



Handpump



SUBJECT -General Knowledge


Match the animal with its baby. Write.



cat



puppy



dog and _____



dog



lamb

sheep and _____



hen



kitten

cat and _____



sheep



foal

horse and _____



horse



chick

hen and _____

MONTHS OF THE YEAR



Read and choose.

January	February	March	April	May	June
July	August	September	October	November	December

1. The **twelfth** month of the year.
2. The **sixth** month of the year.
3. The **ninth** month of the year.
4. The **second** month of the year.
5. The **fourth** month of the year.
6. The **seventh** month of the year.
7. The **third** month of the year.
8. The **tenth** month of the year.
9. The **eleventh** month of the year.
10. The **first** month of the year.
11. The **fifth** month of the year.
12. The **eighth** month of the year.

Make a model of clock

CLOCK
WORKING
MODEL

