



GEETA DEVI DAV PUBLIC SCHOOL

BHANDARKOLA, SATAR ROAD, DEOGHAR

WINTER ASSIGNMENT WORK-(2024-25)

Class: -V

ENGLISH

Bees are insects. Bees are special insects because they can fly! They can move through the air like an airplane! Bees can fly because they have wings. They use their wings to fly. Bees can fly fast. Bees can also fly slow. They can fly up and they can fly down. They need to fly to get to the flowers! Bees can have three colors. They can be yellow, red, and orange. All bees are black in some places. Bees have three main parts. They have a head. They have a body. And, they have a stinger. The stinger is used to defend against enemies. They also have six legs. They use their legs to stand and climb. They also use their legs to eat and collect pollen. Bees live in many places. They live in Africa, Australia, Asia, Europe, North America, South America. The only continent that bees do not live on is Antarctica! I understand why they don't live in Antarctica. It's too cold! Most of the time, bees are nice to humans. If you do not bother them, they will not bother you. Have fun watching the bees this summer!

Q1) Answer the following questions:-

I) What are bees?

A. Mammals

B. Birds

C. Reptiles

D. Insects

II) How do bees fly?

A. They use their legs.

B. They use their head.

C. They use their wings.

D. None of the above.

III) How many legs do bees have?

A. Two

B. Four

C. Six

D. Eight

IV) What is the stinger used for?

A. To eat food.

B. To defend against enemies.

C. Both A and B.

D. None of the above.

V) Where do bees live?

a. North America

B. Asia

C. Antarctica

D. Both A and B

Q2) Fill in the blanks with the correct personal pronoun:

A. John and _____ are going to the park. (I/me)

B. _____ is my best friend. (She/Her)

C. Can _____ help me with this? (you/your)

D. _____ are playing football. (They/Them)

E. The cat is hungry. _____ is looking for food. (It/Its)

.

Q3) Read the following sentences and use has/have/had appropriately.

A. Bernie _____ a meeting yesterday.

B. Do you want to _____ an ice cream?

C. The lion _____ a big mane.

D. My parents _____ gone to a party a few days back.

E. _____ you seen Reema?

F. _____ he not moved to a new city he wouldn't be sick.

G. All the members of the committee _____ arrived now.

H. _____ you seen my new scooter?

I. Raj _____ to go back home.

J. My sister _____ her final exam tomorrow.

HINDI

1. निम्नलिखित गद्यांश को पढ़कर प्रश्नों के उत्तर लिखें :-

एक बूढ़ा किसान था। उसके चार पुत्र थे। वे एक-दूसरे से सदैव झगड़ते थे। किसान ने कई बार उन्हें नहीं झगड़ने की सलाह दी, किन्तु सब व्यर्थ। एक दिन वह किसान बहुत बीमार हो गया। उसने अपने पुत्रों को बुलाया। उसने उन्हें लकड़ियों का एक बंडल दिया। उसने उनसे इसे तोड़ने को कहा। कोई भी इसे नहीं तोड़ सका। उसने इस बंडल को खोलने को कहा। फिर किसान ने अपने लड़कों को लकड़ियाँ तोड़ने को कहा। उन्होंने एक-एक करके सरलता से लकड़ियाँ तोड़ दीं। अब किसान ने अपने लड़कों से कहा-" यदि तुम लकड़ियों के बंडल की तरह इकट्ठे(संगठित) रहोगे, तो कोई तुम्हें नुकसान नहीं पहुँचा सकता है। यदि तुम झगड़ोगे, तो कोई भी तुम्हें नुकसान पहुँचा सकता है।"

प्र. (क) - किसान के कितने बेटे थे ?

उत्तर -

प्र.(ख) - किसान ने बेटों को क्या दिया ?

उत्तर -

प्र.(ग) - इस कहानी से क्या शिक्षा मिलती है ?

उत्तर -

प्र.(घ) - ' लकड़ी ' शब्द का बहुवचन लिखें ।

उत्तर -

प्र.(ङ) - ' चार पुत्र ' शब्द में विशेषण क्या है ?

उत्तर -

2. उचित क्रिया- शब्दों से रिक्त स्थानों की पूर्ति करें :-

क) मोहन कोलकाता से ----- । (लौटाया / लौट आया)

ख) दादी ने माँ से दवा ----- । (मँगवाई/ मँगाना)

ग) क्या तुम बाज़ार ----- ? (जाऊँगा / जाओगे)

घ) सुनील स्कूल से ----- । (आ गया / आँगे)

ड) पिताजी बैंक ----- । (गया / जा रहे हैं)

3. दिए गए वाक्यों का काल पहचानकर लिखिए :-

क) वह पढ़ रहा है । _____

ख) विशाल स्कूल गया होगा । _____

ग) माँ ने खीर बनाई थी । _____

घ) चिड़ियाँ चह- चहा रही थीं । _____

ड) कल हवा बह रही थी । _____

4. निम्नलिखित वाक्यों में कारक चिह्न लगाएँ :-

क) नेहा ----- पुस्तक पढ़ी ।

ख) अध्यापिका ने छात्रों ----- पढ़ाया ।

ग) नाई कैंची ----- बाल काटता है ।

घ) चलो , बस ----- बैठो ।

ड) यह साड़ी दादी जी ----- है ।

MATHEMATICS

1. Find the average of first ten prime numbers.

2. Simplify :- $48 \div 16 \times 2 + 17 - 9$

3. Calculate the amount RS.7,400 at 2.5 % for 9 months

4. Three dozen eggs were sold for RS.270 . If there was a loss of RS. 12, find the cost price of one dozen eggs.

5. In the set of first 10 natural numbers 1 , 2 , 3 ,4 , 5 , 6 , 7 ,8 , 9 and 10.

a) What percent of the numbers are odd?

b) What percent of the numbers are factors of 2?

c) What percent of the numbers are less than 6?

6. Divide 608.35 by 23 and round off quotient to the nearest tenths.

7. Find the average of the first five even numbers .

8. There are 585 people working in a company. On a particular day, 65 people were absent . Find the percentage of the people were present on that day .

SCIENCE

1.Name the astronomer who discovered that the path of planets are elliptical.

Ans: _____

2.Write full forms

NASA _____

ISRO _____

3.**Encircle the odd one:**

Mars, Earth, Uranus, Mercury

Give reason for the same

4.Why should we look for alternatives to fossil fuels?

Ans: _____


5.Why does the window panes of a closed car, get foggy in winter?

Ans: _____

6.Make stars using paper / aluminum foil cutting and then paste it on paper forming a constellation in the space below.

Also make a report on the constellation you have made.

CONSTELLATION



REPORT

Name of the constellation _____

Season in which it is observed _____

Other facts _____

SOCIAL SCIENCE

1. Which is the seventh planet in the solar system?
2. How many oceans are there on the earth?
3. Which planet is called as earth's twin?
4. The earth is covered by 71% of water?
5. A small model of the earth is called.....
6. is the largest country in the world.
7. is the 7th largest country in the world?

8. ----- is the largest ocean.

9. The smallest ocean in the world-----.

10. The large land masses are called-----.

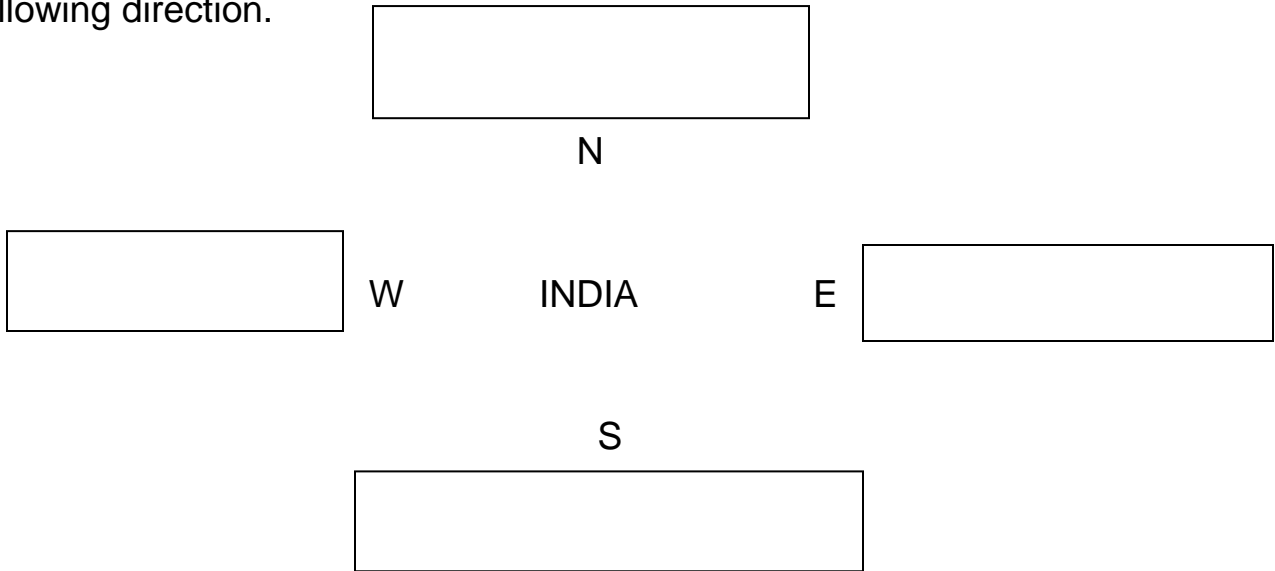
11. The large water bodies are called----- .

12. We all need a----- to live in.


13. We feel ----- in our home.

14. The shape of the Earth is -----.

15. See the political map of India in the Atlas and name one state situated in the following direction.



16. Draw or paste any five picture of community helpers and label it.



17. .

Identify the landforms. Write your answers on the boxes.

hill

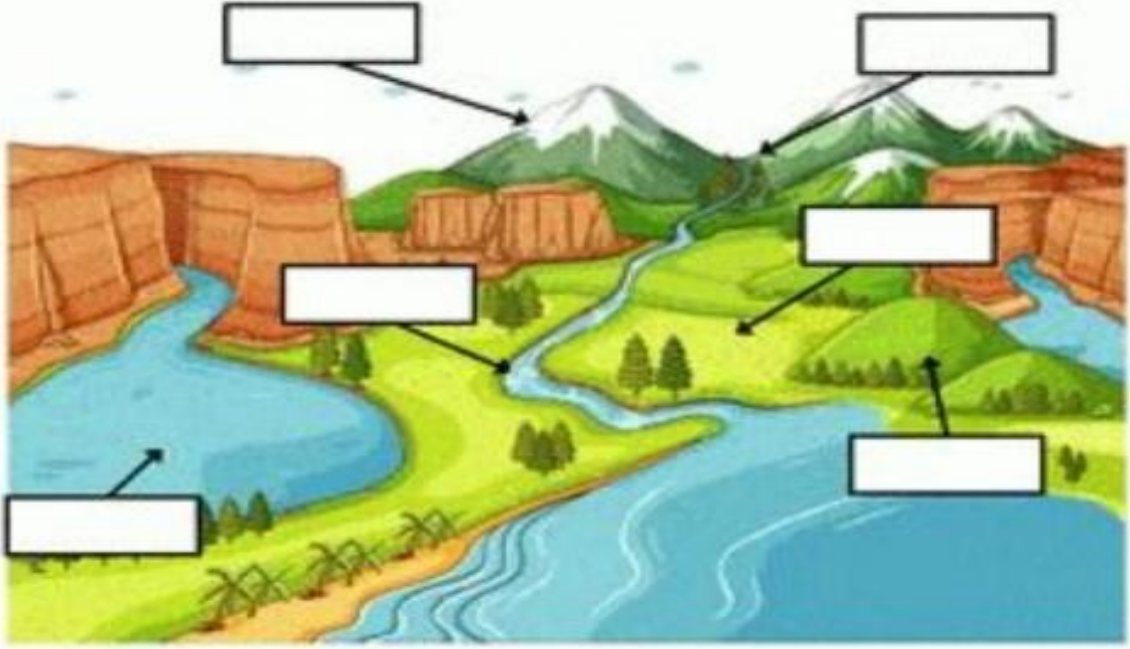
mo unta in

la ke

ri ve r

va lley

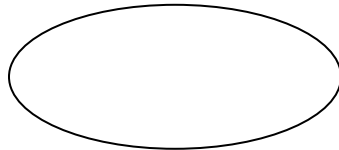
p la in



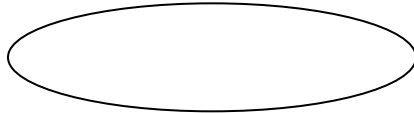
SANSKRIT

१. वत्तु लिखितवर्णेन पूरयतु-

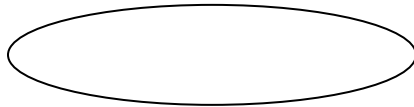
रक्तवर्णः



पीतवर्णः



हररतवर्णः



नीलवर्णः

पाटिलवर्णः

कृष्णवर्णः

GENNERAL KNOWLEDGE

1. First Women Scientist to receive the Nobel Prize in Science?

Answer: _____

2. First woman leader of a Muslim Country in modern history?

Answer: _____

3. First elected women Prime minister of the world ?

Answer: _____

4. . First Indo-American woman in space?

Answer: _____

5. First celebrated nun to receive the Nobel prize in 1979 ?

Answer: _____

6. First Indian women prime minister?

Answer: _____

7. Pongal is celebrated in which state?

Answer: _____

8. Fateh Burj is located in which state?

Answer _____

9. In Chhath festival which lord is worshiped?

Answer: _____

10. Arjuna award is given to which person?

Answer: _____

11. Bagru prints are famous prints of which state?

Answer: _____

12. Who is the first women pilot ?

Answer: _____

13. Who painted the famous the Monalisa ?

Answer: _____

14. Who started the Shanti Niketan school?

Answer _____

15. Who wrote geet govind in sanskrit? _____